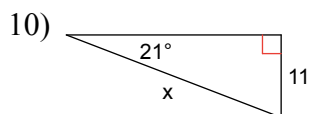
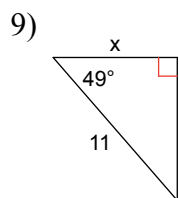
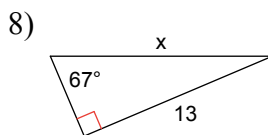
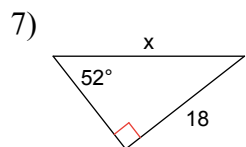
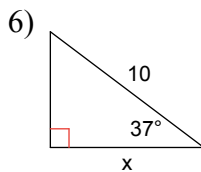
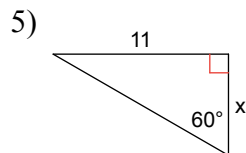
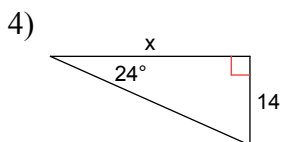
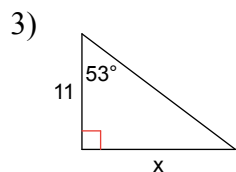
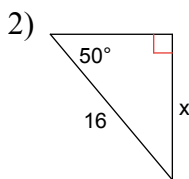
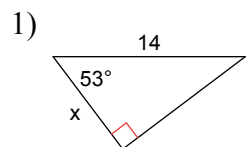


HW 5.1 Introduction to Trigonometry

Date _____ Period _____

Find the missing side. Round to the nearest tenth.



Answers to HW 5.1 Introduction to Trigonometry (ID: 1)

1) 8.4
5) 6.4
9) 7.2

2) 12.3
6) 8.0
10) 30.7

3) 14.6
7) 22.8

4) 31.4
8) 14.1